

1	I can add and subtract 3 digit numbers mentally	I can recall multiplication and division facts to 12x12	I can calculate and record multiplications using the rectangle grid method.
---	---	---	---

Can you work out the missing numbers?

499 + _____ = 999

59 + _____ = 169

90 + _____ = 699

275 + _____ = 875

85 + _____ = 95


_____ + 75 = 115

_____ + 50 = 62

840 + _____ = 970

Score

Complete the fact on the robot and then write the multiplication and division facts.



x =
 x =
 ÷ =
 ÷ =

Score

12 × 4 = _____

x	10	2	= _____
4			

18 × 2 = _____

x	10	8	= _____
2			

34 × 2 = _____

x	30	4	= _____
2			

Score

8	5	9	
---	---	---	--

Total Score

2	I can recall multiplication and division facts to 12x12	I can add and subtract 3 digit numbers mentally	I can calculate and record multiplications using the rectangle grid method.
---	---	---	---

Can you work out the missing numbers?

$80 + \underline{\hspace{2cm}} = 490$

$30 + \underline{\hspace{2cm}} = 120$

$299 + \underline{\hspace{2cm}} = 699$

$210 + \underline{\hspace{2cm}} = 450$

$35 + \underline{\hspace{2cm}} = 95$

$\underline{\hspace{2cm}} + 55 = 105$


$\underline{\hspace{2cm}} + 322 = 562$

$347 + \underline{\hspace{2cm}} = 777$

Score

8

Complete the fact on the robot and then write the multiplication and division facts.



x =
 x =
 ÷ =
 ÷ =

Score

5

$18 \times 5 = \underline{\hspace{2cm}}$

x	10	8	
5			

=

$14 \times 3 = \underline{\hspace{2cm}}$

x	10	4	
3			

=

$23 \times 4 = \underline{\hspace{2cm}}$

x	20	3	
4			

=

Score

9

Total Score:

3	I can recall multiplication and division facts to 12x12	I can add and subtract 3 digit numbers mentally	I can calculate and record multiplications using the rectangle grid method.
---	---	---	---

Can you work out the missing numbers?

270 + _____ = 490

35 + _____ = 235

339 + _____ = 699

310 + _____ = 410

55 + _____ = 205


_____ + 55 = 255

_____ + 162 = 572

567 + _____ = 777

Score

Complete the fact on the robot and then write the multiplication and division facts.



x =
 x =
 ÷ =
 ÷ =

Score

22 × 8 = _____

x	20	2
8		

= _____

15 × 8 = _____

x	10	5
8		

= _____

45 × 3 = _____

x	40	5
3		

= _____

Score

8	5	9
---	---	---

Total Score:

4	I can recall multiplication and division facts to 12x12	I can add and subtract 3 digit numbers mentally	I can calculate and record multiplications using the rectangle grid method.
---	---	---	---

Can you work out the missing numbers?

190 + _____ = 592

10 + _____ = 120

699 + _____ = 699

320 + _____ = 653

55 + _____ = 95

_____ + 55 = 105


_____ + 322 = 562

347 + _____ = 777

Score

8

Complete the fact on the robot and then write the multiplication and division facts.



x =
 x =
 ÷ =
 ÷ =

Score

5

14 × 4 = _____

x		

= _____

18 × 3 = _____

x		

= _____

24 × 3 = _____

x		

= _____

Score

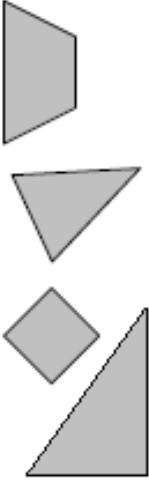
9

Total Score:

Challenge Working out page

<u>Monday</u>	xtable practice	<u>Tuesday</u>	xtable practice
<u>Wednesday</u>	xtable practice	<u>Thursday</u>	xtable practice

1.

1																																																					
2			<table border="1"><tbody><tr><td>0</td><td>1</td><td>2</td><td>3</td><td>4</td><td>5</td><td>6</td><td>7</td><td>8</td><td>9</td></tr><tr><td>10</td><td>11</td><td>12</td><td>13</td><td>14</td><td>15</td><td>16</td><td>17</td><td>18</td><td>19</td></tr><tr><td>20</td><td>21</td><td>22</td><td>23</td><td>24</td><td>25</td><td>26</td><td>27</td><td>28</td><td>29</td></tr><tr><td>30</td><td>31</td><td>32</td><td>33</td><td>34</td><td>35</td><td>36</td><td>37</td><td>38</td><td>39</td></tr><tr><td>40</td><td>41</td><td>42</td><td>43</td><td>44</td><td>45</td><td>46</td><td>47</td><td>48</td><td>49</td></tr></tbody></table>	0	1	2	3	4	5	6	7	8	9	10	11	12	13	14	15	16	17	18	19	20	21	22	23	24	25	26	27	28	29	30	31	32	33	34	35	36	37	38	39	40	41	42	43	44	45	46	47	48	49
0	1	2	3	4	5	6	7	8	9																																												
10	11	12	13	14	15	16	17	18	19																																												
20	21	22	23	24	25	26	27	28	29																																												
30	31	32	33	34	35	36	37	38	39																																												
40	41	42	43	44	45	46	47	48	49																																												
3																																																					
4																																																					
5			pence																																																		
6																																																					
7																																																					
8																																																					
9																																																					
10																																																					